

GS-2017-Y (Physics)**TATA INSTITUTE OF FUNDAMENTAL RESEARCH**

Written Test in PHYSICS – December 11, 2016

Duration : 3 (Three) Hours

NAME: _____ REF. CODE: _____

Please Read These Instructions Carefully Before Attempting the Questions

1. Please fill in details about name, reference code etc. on the answer sheet and question paper. Use only blue/black ballpoint pen. The Answer Sheet is machine-readable and will not read other colours.
2. This test consists of three parts: **Section A**, **Section B** and **Section C**. You must answer questions according to the programme you are applying for.

Candidates applying for	Must answer	Should not attempt
Integrated M.Sc.-Ph.D.	Section A + Section B	Section C
Ph.D.	Section A + Section C	Section B

Section A has 25 questions : 1 – 15 are multiple-choice; 16 – 25 are numerical.

Section B has 15 questions : 26 – 35 are multiple-choice; 36 – 40 are symbolic.

Section C has 15 questions : 41 – 50 are multiple-choice; 51 – 55 are symbolic.

3. Indicate your ANSWER ON THE ANSWER SHEET as follows.

Multiple choice questions have four options (a), (b), (c) and (d), of which only one option is correct. Indicate the answers by filling up the bubble on the Answer Sheet corresponding to the correct option. If more than one bubble is filled in, it will be treated as not answered.

Numerical questions have answers which are 3 (three) digit integers. Indicate the answers by filling in the corresponding bubbles on the Answer Sheet. Unless all three bubbles for a given question are filled, it will be treated as not answered. (See inside for details.)

Symbolic questions have answers which are a number, a short formula or a word. Indicate the answers by writing in the boxes on the Answer Sheet next to the appropriate question numbers. (See inside for details.)

4. The marking for these questions shall be as follows.

If the answer is	Multiple-choice	Numerical	Symbolic
Correct	+3	+5	+5
Incorrect	-1	0	0
Not attempted	0	0	0
Multiple options marked	0	—	—

Note that only multiple-choice type questions have negative marking.

continued on next page...

5. Candidates are advised to mark the Answer Sheet only when they are sure of the answer. Till then, they may mark the answers on the question paper.
6. Rough work may be done on blank pages of the question paper. If needed, you may ask for extra sheets from the invigilators.
7. Use of scientific, non-programmable calculators is permitted. Calculators which plot graphs are NOT allowed. Multiple-use devices, such as cell phones, smartphones, etc. CANNOT be used as calculators.
8. Do NOT ask the invigilators for clarifications regarding the questions. They have been instructed not to respond to any such queries. In case a correction/clarification is deemed necessary, it will be announced in the examination hall.
9. A list of useful physical constants is given on the next page. Make sure to use only these values in answering the questions, especially those of numeric type.

USEFUL CONSTANTS

Symbol	Name/Definition	Value
c	speed of light in vacuum	$3 \times 10^8 \text{ m s}^{-1}$
\hbar	reduced Planck constant ($= h/2\pi$)	$1.04 \times 10^{-34} \text{ J s}$
G_N	gravitational constant	$6.67 \times 10^{-11} \text{ m}^3 \text{ kg}^{-1} \text{ s}^{-2}$
M_\odot	solar mass	$1.989 \times 10^{30} \text{ kg}$
ϵ_0	permittivity of free space	$8.85 \times 10^{-12} \text{ F m}^{-1}$
μ_0	permeability of free space	$4\pi \times 10^{-7} \text{ N A}^{-2}$
e	electron charge (magnitude)	$1.6 \times 10^{-19} \text{ C}$
m_e	electron mass	$9.1 \times 10^{-31} \text{ kg}$ $= 0.5 \text{ MeV}/c^2$
a_0	Bohr radius	0.51 \AA
	ionisation potential of H atom	13.6 eV
N_A	Avogadro number	$6.023 \times 10^{23} \text{ mol}^{-1}$
k_B	Boltzmann constant	$1.38 \times 10^{-23} \text{ J K}^{-1}$ $= 8.6173 \times 10^{-5} \text{ eV K}^{-1}$
$R = N_A k_B$	gas constant	$8.31 \text{ J mol}^{-1} \text{ K}^{-1}$
$\gamma = C_p/C_V$	ratio of specific heats: monatomic gas	1.67
	diatomic gas	1.40
σ	Stefan-Boltzmann constant	$5.67 \times 10^{-8} \text{ W m}^{-2} \text{ K}^{-4}$
α	fine structure constant ($= e^2/4\pi\epsilon_0\hbar c$)	$1/137$
g	acceleration due to gravity	9.8 m s^{-2}
R_E	radius of the Earth	$6.4 \times 10^3 \text{ Km}$
R_S	radius of the Sun	$7 \times 10^5 \text{ Km}$
m_p	proton mass ($\approx 2000 m_e$)	$1.7 \times 10^{-27} \text{ kg}$ $= 938.2 \text{ MeV}/c^2$
m_n	neutron mass ($\approx 2000 m_e$)	$1.7 \times 10^{-27} \text{ kg}$ $= 939.6 \text{ MeV}/c^2$

UNIT CONVERSIONS

Symbol	Name/Definition	Value
1 A.U.	mean distance of Earth from Sun	$1.5 \times 10^9 \text{ km}$
1 a.m.u.	atomic mass unit	$1.6 \times 10^{-27} \text{ kg}$ $= 931.5 \text{ MeV}/c^2$
1 eV	electron Volt	$1.6 \times 10^{-19} \text{ J}$
1 T	Tesla	10^4 gauss
1 bar	mean atmospheric pressure at 0°C	$1.01 \times 10^5 \text{ Pa (= N m}^{-2}\text{)}$
1 \AA	Ångstrom unit	10^{-8} cm
$\hbar c$	conversion constant	$3.16 \times 10^{-26} \text{ J m}^{-1}$ $= 0.1973 \text{ GeV fm}$

GS-2017-Y (Physics)

Section A

Q. 1 – 25 : to be attempted by ALL candidates

PLEASE READ CAREFULLY BEFORE PROCEEDING FURTHER

The following questions (1 – 15) are all of multiple-choice type. For every question, four options (a), (b), (c) and (d) are given, of which *only one* is correct. Indicate the correct option on the OMR by filling the bubble.

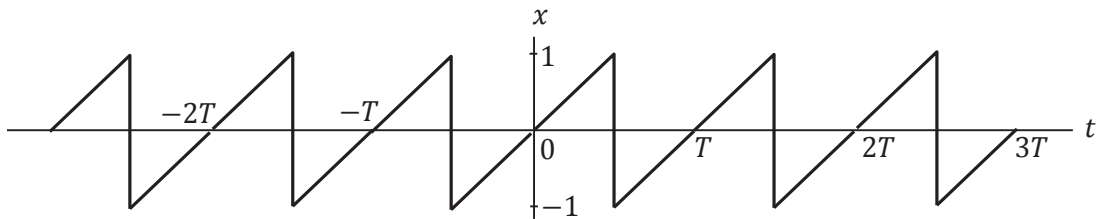
A correct answer will be awarded +3 marks and an incorrect answer will be awarded –1 mark. If the question is not attempted, no marks will be awarded.

1. Denote the commutator of two matrices A and B by $[A, B] = AB - BA$ and the anti-commutator by $\{A, B\} = AB + BA$.

If $\{A, B\} = 0$, we can write $[A, BC] =$

- (a) $-B[A, C]$ (b) $B\{A, C\}$ (c) $[A, C]B$ (d) $-B\{A, C\}$ ✓

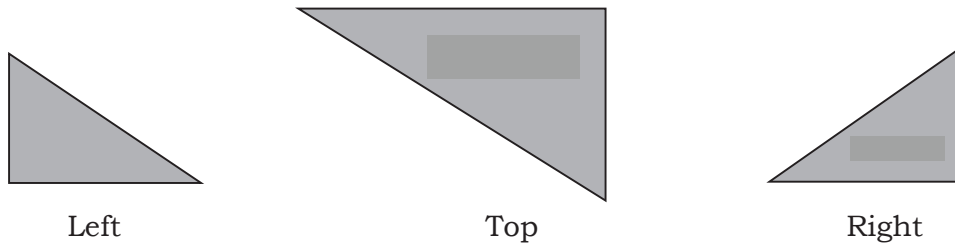
2. Consider the waveform $x(t)$ shown in the diagram below.



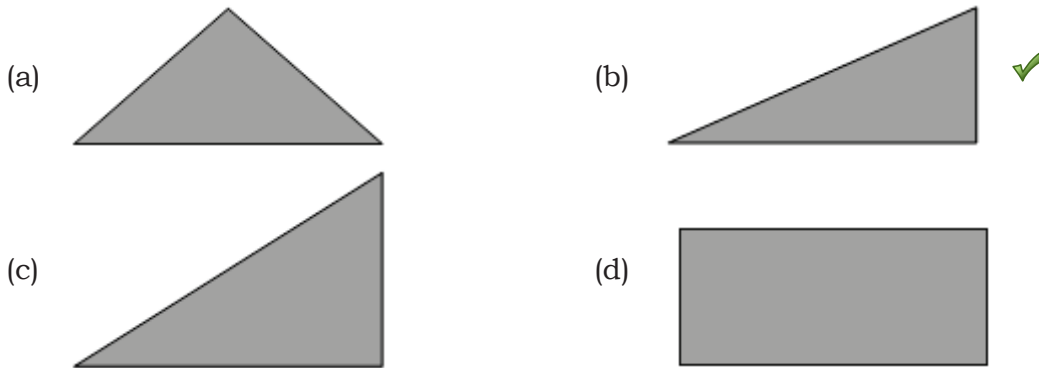
The Fourier series for $x(t)$ which gives the closest approximation to this waveform is

- (a) $x(t) = \frac{2}{\pi} \left[\cos \frac{\pi t}{T} - \frac{1}{2} \cos \frac{4\pi t}{T} + \frac{1}{3} \cos \frac{3\pi t}{T} + \dots \right]$
- (b) $x(t) = \frac{2}{\pi} \left[-\cos \frac{2\pi t}{T} + \frac{1}{2} \cos \frac{4\pi t}{T} - \frac{1}{3} \cos \frac{6\pi t}{T} + \dots \right]$
- (c) $x(t) = \frac{2}{\pi} \left[\sin \frac{\pi t}{T} - \frac{1}{2} \sin \frac{2\pi t}{T} + \frac{1}{3} \sin \frac{3\pi t}{T} + \dots \right]$ ✓
- (d) $x(t) = \frac{2}{\pi} \left[-\sin \frac{\pi t}{T} + \frac{1}{2} \sin \frac{2\pi t}{T} - \frac{1}{3} \sin \frac{3\pi t}{T} + \dots \right]$

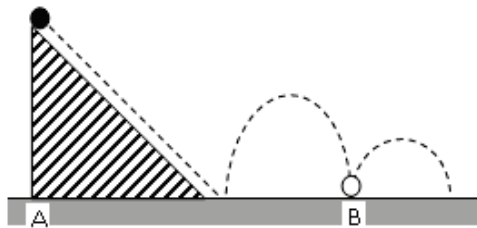
3. A solid tetrahedron (solid with four plane sides) has the following projections (drawn to scale) when seen from three different sides:



When viewed from the front, its projection will be



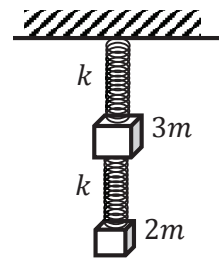
4. A small elastic ball of mass m is placed at the apex of a 45° inclined plane as shown in the figure below.



The ball is allowed to slip without friction down the plane (along the dotted line), hit the ground (as shown) and bounce along it. If the height of the inclined plane is h and the coefficient of restitution between the ball and the ground is 0.5, then the distance AB, as marked on the figure, will be

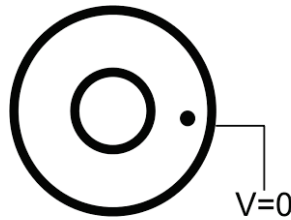
- (a) $(1 + \sqrt{2})h$ (b) $3\sqrt{2}h$ (c) $3h$ (d) $2h$ ✓

5. Two masses $3m$ and $2m$ are suspended vertically by identical massless springs, each of stiffness constant k . The mass $2m$ is suspended from the mass $3m$ and the mass $3m$ is suspended from a rigid support, as shown in the figure. If only vertical motion is permitted, the frequencies of small oscillations of this system are

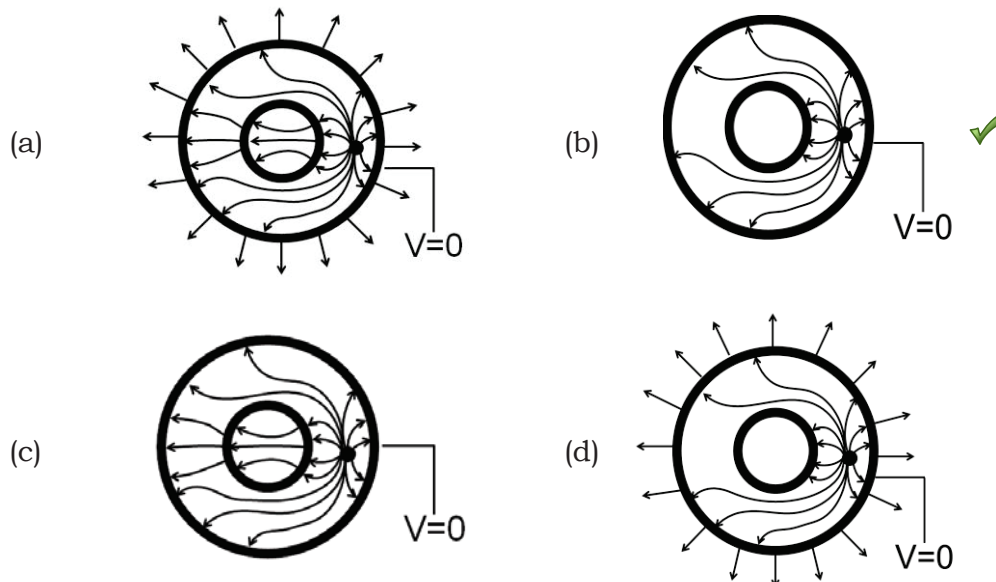


- (a) $\sqrt{\frac{k}{m}}, \sqrt{\frac{3k}{2m}}$ (b) $\sqrt{\frac{k}{2m}}, \sqrt{\frac{k}{3m}}$ (c) $\sqrt{\frac{k}{m}}, \sqrt{\frac{k}{6m}}$ ✓ (d) $\sqrt{\frac{2k}{3m}}, \sqrt{\frac{3k}{2m}}$

6. Two long hollow conducting cylinders, each of height h , are placed concentrically on the ground, as shown in the figure (top view). The outer cylinder is grounded, while the inner cylinder is insulated. A positive charge (the black dot in the figure) is placed between the cylinders at a height $h/2$ from the ground.



Which of the following figures gives the most accurate representation (top view) of the lines of force ?



7. A common model for the distribution of charge in a hydrogen atom has a point-like proton of charge $+q_0$ at the centre and an electron with a static charge density distribution

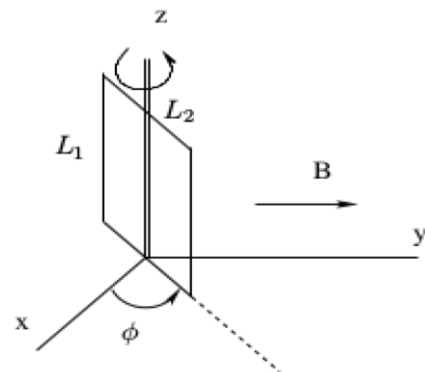
$$\rho(r) = -\frac{q_0}{\pi a^3} e^{-2r/a}$$

where a is a constant. The electric field \vec{E} at $r = a$ due to this system of charges will be

- (a) $-\frac{5q_0}{4\pi\epsilon_0 e^2 a^2} \hat{r}$ (b) $-\frac{5q_0}{4\pi\epsilon_0 e a^2} \hat{r}$
 (c) $\frac{3q_0}{4\pi\epsilon_0 e^2 a^2} \hat{r}$ (d) $\frac{5q_0}{4\pi\epsilon_0 e^2 a^2} \hat{r}$ ✓

8. A rectangular metallic loop with sides L_1 and L_2 is placed in the vertical plane, making an angle φ with respect to the x -axis, as shown in the figure, and a spatially uniform magnetic field $\vec{B} = B\hat{y}$ is applied. The loop is free to rotate about the \hat{z} axis (shown in the figure with a double line). The magnetic field changes with time at a constant rate

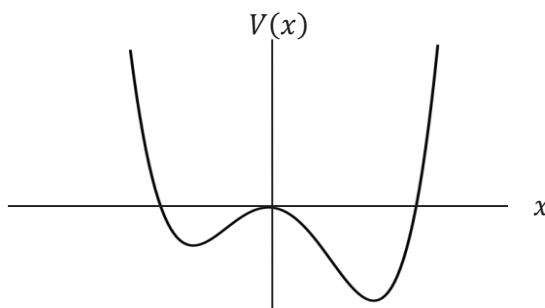
$$\frac{dB}{dt} = \kappa$$



If the resistance of the loop is R , the torque τ required to prevent the loop from rotating will be

- (a) $\kappa B \frac{(L_1 L_2)^2}{2R} \sin \varphi \hat{z}$ (b) $-\kappa B \frac{(L_1 L_2)^2}{2R} \sin 2\varphi \hat{z}$ ✓
- (c) $\kappa B \frac{(L_1 L_2)^2}{R} \sin \varphi \cos \varphi \hat{z}$ (d) $-\kappa B \frac{(L_1 L_2)^2}{R} \sin \varphi \hat{z}$

9. Consider the 1-D asymmetric double-well potential $V(x)$ as sketched below.



The probability distribution $p(x)$ of a particle in the ground state of this potential is best represented by

- (a) (b)
- (c) ✓ (d)

10. The normalized wave function of a particle can be written as

$$\Psi(x) = N \sum_{n=0}^{\infty} \left(\frac{1}{\sqrt{7}}\right)^n \varphi_n(x)$$

where $\varphi_n(x)$ are the normalized energy eigenfunctions of a given Hamiltonian. The value of N is

(a) $\sqrt{(6 - 2\sqrt{7})/7}$

(b) $\sqrt{1/7}$

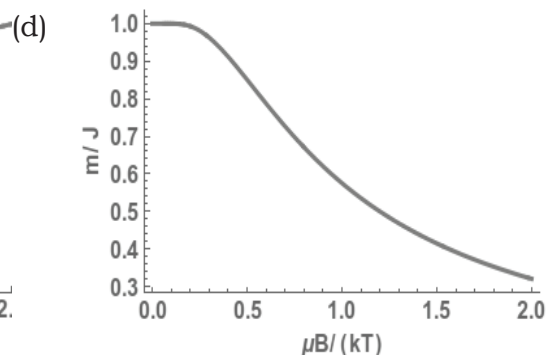
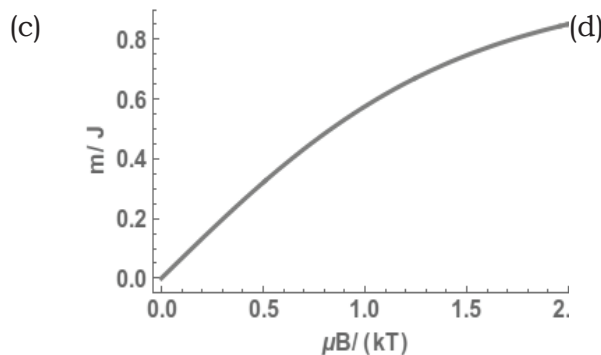
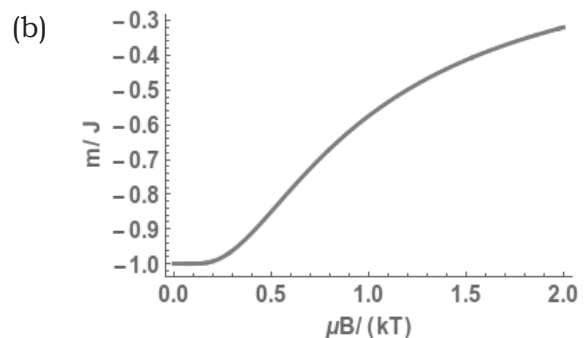
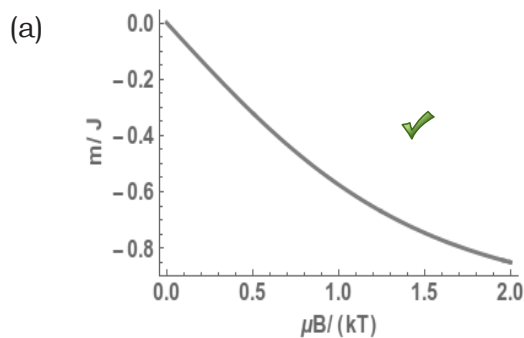
(c) $\sqrt{3/7}$

(d) $\sqrt{6/7}$ ✓

11. Consider a system of non-interacting particles with integer angular momentum J at a temperature T . This system is placed in a magnetic field B in the z direction. The energy of a state with $J_z = m\hbar$ is

$$E_m = m\mu_B B$$

with $\mu_B > 0$. The fractional magnetization of the particles as a function of $\mu_B B/k_B T$ can be represented as



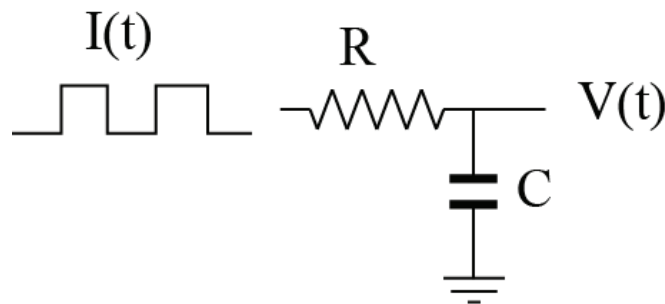
12. The separation between neighbouring absorption lines in a pure rotational spectrum of the hydrogen bromide (HBr) molecule is 2.23 meV. If this molecule is considered as a rigid rotor and the atomic mass number of Br is 80, the corresponding absorption line separation in deuterium bromide (DBr) molecule, in units of meV, would be

- (a) 2.234 (b) 1.115 (c) 4.461 (d) 1.128 ✓

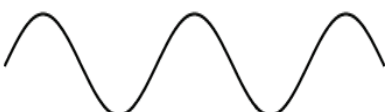



13. Consider a 2-D square lattice. The ratio of the kinetic energy of a free electron at a corner of the first Brillouin zone (E_c) to that of an electron at the midpoint of a side face of the same zone (E_m) is $E_c/E_m =$

- (a) 2 ✓ (b) $\sqrt{2}$ (c) 1 (d) 1/2

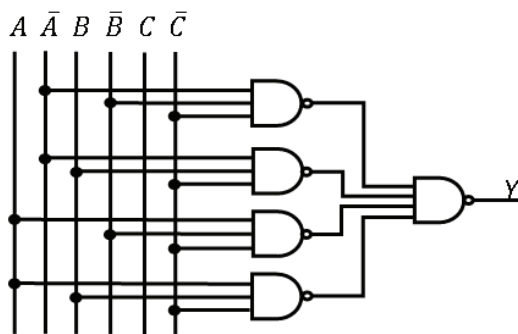
14. A current source produces a square wave $I(t)$ of 1.0 V peak-to-peak voltage and is used to drive the RC circuit shown below.



Which of the following represents the correct voltage across the capacitor C ?

- (a)  (b)  ✓
- (c)  (d) 

15. The output (Y) of the following circuit will be



(a) \bar{C} ✓

(b) \bar{B}

(c) \bar{A}

(d) $\bar{A} + B + \bar{C}$

Section A continues (to be answered by ALL candidates)

PLEASE READ CAREFULLY BEFORE PROCEEDING FURTHER

The answers to the following questions (16 – 25) are all integers of 3 (three) digits each. You may round off decimal parts, e.g. $122.5 \leq x < 123.5$, as $x = 123$ and e.g. $123.5 \leq x < 124.5$ as $x = 124$ and so on.

Use only values of constants given in the table ‘USEFUL CONSTANTS’.

Answer these questions on the OMR by filling in bubbles as you did for your reference code. Note that if the answer is, e.g. 25, you must fill in 025 and if it is, e.g. 5, you must fill in 005. If it is 0, you must fill in 000. If the zeros are not filled in (where required), the answer will not be credited.

A correct answer will be awarded +5 marks.

There are NO NEGATIVE MARKS for these questions.

16. A space telescope in orbit around the Earth discovers a new planet, which is observed to move around the Sun by an angle of 4.72 milliradians in a year. Assuming a circular orbit, estimate the distance, in A.U., of the planet from the Sun.

Ans = 121

17. The matrix

$$\begin{pmatrix} 100\sqrt{2} & x & 0 \\ -x & 0 & -x \\ 0 & x & 100\sqrt{2} \end{pmatrix}$$

where $x > 0$, is known to have two equal eigenvalues. Find the value of x .

Ans = 050

18. A beam of plane microwaves of wavelength 12 cm strikes the surface of a dielectric at 45° . If the refractive index of the dielectric is $4/3$, what will be the wavelength, in units of mm, of the microwaves inside the dielectric?

Ans = 090

19. A system of particles occupying single-particle levels and obeying Maxwell-Boltzmann statistics is in thermal equilibrium with a heat reservoir at temperature T . If the population distribution in the non-degenerate energy levels is as shown in the table below, what would be the temperature of the system in degree Kelvin?

Energy (eV)	Population %
30.30	3.16
21.60	8.69
13.01	23.54
4.31	64.61

Given +5 marks to all students.

20. A thermally isolated container stores N_2 gas at 27.24°C at one atmospheric pressure. Suddenly the pressure of the gas is increased to two atmospheric pressures. Assuming N_2 to behave as an ideal gas, estimate the change in temperature of the gas, in Celsius degrees ($^\circ\text{C}$).

Ans = 066

21. A signal is to be sent from a coaxial cable with impedance $40\ \Omega$ into a second coaxial cable with impedance $60\ \Omega$. We can prevent reflection at the joint between the cables, by adding an impedance in parallel to the second cable. What should be the value, in units of Ohms (Ω), of that impedance?

Ans = 120

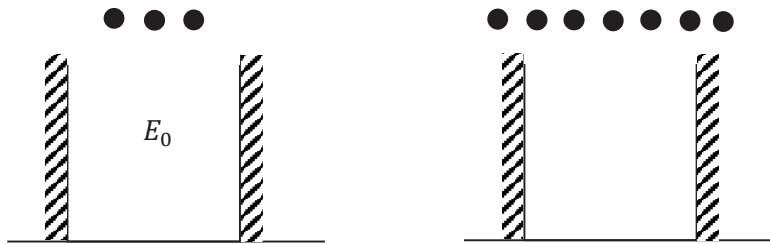
22. An AC voltage source has an internal resistance of $50\ \Omega$ and is specified to deliver an rms voltage of 50 V to a matched load. If you connect this AC source to a cathode-ray oscilloscope with $1\ \text{M}\Omega$ input setting, what will be the peak-to-peak voltage you observe?

Ans = 283

23. The energy of an electron in the ground state of the He atom is $-79\ \text{eV}$. Considering the Bohr model of the atom, what would be 10 times the first ionization potential for a He^+ ion, in units of eV?

Ans = 246

24. A quantum mechanical system consists of a one-dimensional infinite box, as indicated in the figures below.



3 (three) identical non-interacting spin- $\frac{1}{2}$ particles, are first placed in the box, and the ground state energy of the system is found to be $E_0 = 18$ eV. If 7 (seven) such identical particles are placed in the box, what will be the ground state energy, in units of eV?

Ans = 132

25. Cosmic ray muons, which decay spontaneously with proper lifetime $2.2 \mu\text{s}$, are produced in the atmosphere, at a height of 5 km above sea level. These move straight downwards at 98% of the speed of light.

Find the percent ratio $100 \times (N_A/N_B)$ of the number of muons measured at the top of two mountains A and B, which are at heights 4,848 m and 2,682 m respectively above mean sea level.

Ans = 052

GS-2017-Y (Physics)

Section B

Q. 26 – 40 : to be attempted only by all candidates for
Integrated M.Sc.-Ph.D. programme.

(Candidates for Ph.D. programme will get NO credit for attempting this section.)

PLEASE READ CAREFULLY BEFORE PROCEEDING FURTHER

The following questions (26 – 35) are all of multiple-choice type. For every question, four options (a), (b), (c) and (d) are given, of which *only one* is correct. Indicate the correct option on the OMR by filling in the bubble next to the correct label.

A correct answer will be awarded +3 marks and an incorrect answer will be awarded –1 mark. If the question is not attempted, no marks will be awarded.

26. A unitary matrix U is expanded in terms of a Hermitian matrix H , such that

$$U = e^{i\pi H/2}$$

If we know that

$$H = \begin{pmatrix} 1/2 & 0 & \sqrt{3}/2 \\ 0 & 1 & 0 \\ \sqrt{3}/2 & 0 & -1/2 \end{pmatrix}$$

then U must be

(a) $\begin{pmatrix} i/2 & 0 & i\sqrt{3}/2 \\ 0 & i & 0 \\ i\sqrt{3}/2 & 0 & -i/2 \end{pmatrix}$ ✓

(b) $\begin{pmatrix} i & 1/2 & \sqrt{3}/2 \\ 1/2 & i & 1/2 \\ \sqrt{3}/2 & 1/2 & i \end{pmatrix}$

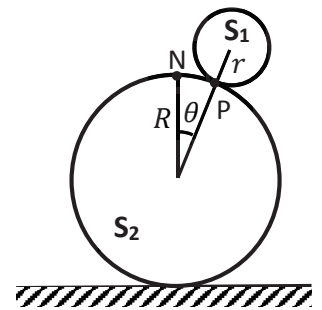
(c) $\begin{pmatrix} 1 & 0 & \sqrt{3} \\ 0 & 2 & 0 \\ \sqrt{3} & 0 & -1 \end{pmatrix}$

(d) $\begin{pmatrix} 2i & 1 & \sqrt{3}/2 \\ 1 & 2i & 0 \\ \sqrt{3}/2 & 0 & 2i \end{pmatrix}$

27. A liquid is flowing through a capillary tube of inner radius r under the influence of an external pressure P . The uncertainties in the measurements of P and r are found to be 2% and 1%, respectively. The uncertainty in the flow of liquid per second is

- (a) 3.61% (b) 2.23% (c) 2.83% (d) 4.47% ✓

28. A uniform solid sphere S_1 of radius r and mass m is rolling without slipping on top of another sphere S_2 of radius R , as shown in the figure. Initially, S_1 was at rest directly on top of S_2 , and then it started rolling down under the influence of gravity. The point of contact P subtends an instantaneous angle θ from the topmost point N of the lower sphere at the centre of the lower sphere.



At what minimum value of θ will the spheres lose contact?

- (a) $\cos^{-1} \frac{5}{13}$ (b) $\cos^{-1} \frac{5}{12}$ ✓ (c) $\cos^{-1} \frac{2}{3}$ (d) $\cos^{-1} \frac{12}{13}$

29. An electromagnetic wave in free space is described by

$$\vec{E}(x, y, z, t) = \hat{z} E_0 \cos \frac{1}{2} (kx - \sqrt{3}ky - 2\omega t)$$

The Poynting vector associated with this wave is along the direction

- (a) $\hat{x} + \sqrt{3} \hat{y}$ (b) $\sqrt{3} \hat{x} + \hat{y}$
 (c) $\hat{x} - \sqrt{3} \hat{y}$ ✓ (d) $-\sqrt{3} \hat{x} + \hat{y}$

30. Electrons in a given system of hydrogen atoms are described by the wave function

$$\psi(r, \theta, \varphi) = 0.8 \Psi_{100} + 0.6 e^{i\pi/3} \Psi_{311}$$

where the $\Psi_{n\ell m}$ denote normalized energy eigenstates. If $(\hat{L}_x, \hat{L}_y, \hat{L}_z)$ are the components of the orbital angular momentum operator, the expectation value of \hat{L}_x^2 in this system is

- (a) $1.5\hbar^2$ (b) $0.18\hbar^2$ ✓ (c) $0.36\hbar^2$ (d) Zero

31. In two dimensions, two metals A and B, have the number density of free electrons in the ratio

$$n_A : n_B = 1 : 2$$

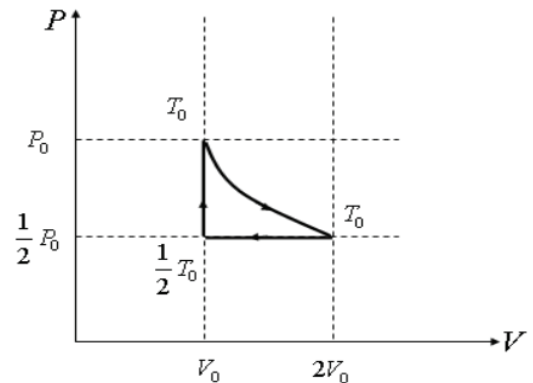
The ratio of their Fermi energies is

- (a) 2:3 (b) 1:8 (c) 1:2 ✓ (d) 1:4

32. One mole of monoatomic ideal gas is initially at pressure P_0 and volume V_0 .

The gas then undergoes a three-stage cycle consisting of the following processes:

- i) An isothermal expansion till it reaches volume $2V_0$, and heat Q flows into the gas
- ii) An isobaric compression back to the original volume V_0
- iii) An isochoric increase in pressure till the original pressure P_0 is regained.



The corresponding P-V diagram is shown above.

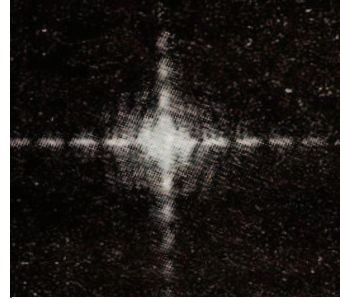
The efficiency of this cycle can be expressed as

- (a) $\epsilon = \frac{4Q - 2RT_0}{4Q + 3RT_0}$ ✓ (b) $\epsilon = \frac{4Q + 2RT_0}{4Q - 3RT_0}$
- (c) $\epsilon = \frac{4Q - 2RT_0}{4Q + RT_0}$ (d) $\epsilon = \frac{4Q + 2RT_0}{4Q + RT_0}$

33. A deuteron of mass M and binding energy B is struck by a gamma ray photon of energy E_γ , and is observed to disintegrate into a neutron and a proton. If $B \ll Mc^2$, the minimum value of E_γ must be

- (a) $2B + \frac{B^2}{2Mc^2}$ (b) $\frac{1}{2} \left(3B + \frac{B^2}{Mc^2} \right)$
- (c) $B + \frac{B^2}{Mc^2}$ (d) $\frac{1}{2} \left(2B + \frac{B^2}{Mc^2} \right)$ ✓

34. Light passes through a narrow slit and gives the Fraunhofer diffraction pattern shown in the adjacent figure.



Which of the following could be the shape of the slit?



35. For exact calculation and minimum complexity, two four-digit binary numbers can be added with

- (a) 3 full adders and 1 half-adder ✓ (b) 2 full adders and 2 half-adders
(c) 1 full adder and 3 half-adders (d) 4 full adders

Part B continues on next page
(to be attempted by all candidates for Int. M.Sc.-Ph.D. programme)
PLEASE READ CAREFULLY BEFORE PROCEEDING FURTHER

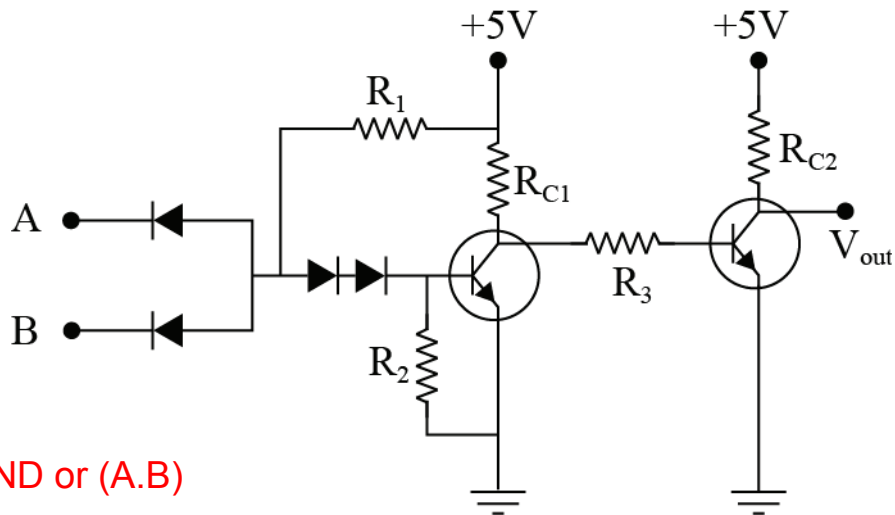
Each of the following questions (36 – 40) must be answered by a word or a number or a simple mathematical expression, which must be written down clearly and legibly using only black/blue ballpoint pen. If there are any cancellations, overwriting or erasures, the question will be considered un-answered.

Use only values of constants given in the table ‘USEFUL CONSTANTS’.

A correct answer will be awarded +5 marks.

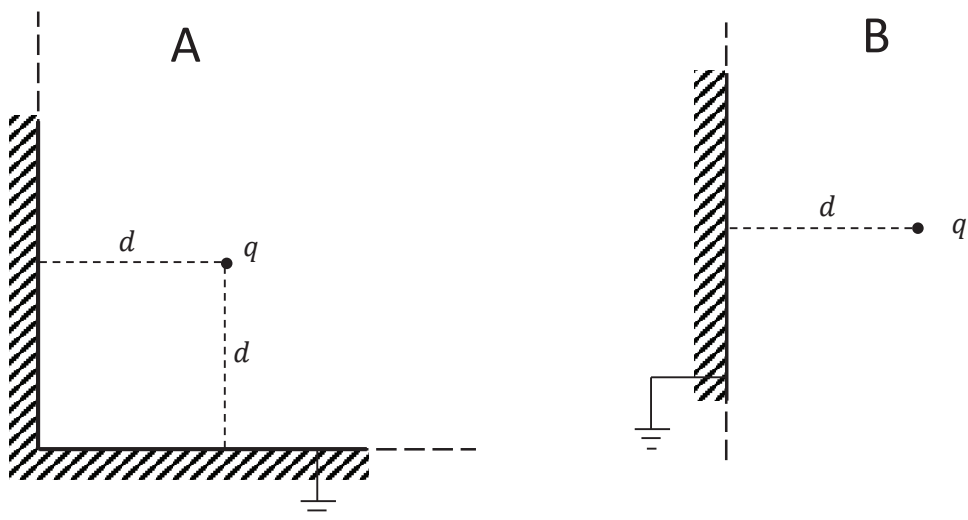
There are NO NEGATIVE MARKS for these questions.

36. Which digital logic gate is mimicked by the following silicon diode and silicon transistor circuit?



Ans = AND or (A.B)

37. Consider the following situations.



In situation A, two semi-infinite earthed conducting planes meet at right-angles. A point charge q , is placed at a distance d from each plane, as shown in the figure A. The magnitude of the force exerted on the charge q is denoted F_A .

In situation B, the same charge q is kept at the same distance d from an infinite earthed conducting plane, as shown in the figure B. The magnitude of the force exerted on the charge q is denoted F_B .

Find the numerical ratio F_A/F_B

Ans = 0.9142

38. Two identical bosons may occupy any of two energy levels $0, \varepsilon$, where $\varepsilon > 0$. The lowest energy state is doubly-degenerate and the excited state is non-degenerate. Assume that the two-particle system is in thermal equilibrium at a temperature T . Calculate the average energy $\langle E \rangle$. What will be the leading term of

$$\frac{\langle E \rangle}{\exp\left(-\frac{\varepsilon}{k_B T}\right)}$$

at low temperature?

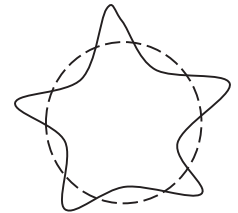
Ans = $2 \cdot \varepsilon / 3$

39. Evaluate the expression

$$n! \int_0^A dx_{n-1} \int_0^{x_{n-1}} dx_{n-2} \int_0^{x_{n-2}} dx_{n-3} \dots \int_0^{x_3} dx_2 \int_0^{x_2} dx_1 \int_0^{x_1} dx_0$$

Ans = A^n

40. In outer space, where the effects of gravity can be neglected, a drop of liquid assumes a spherical shape. However, when disturbed it undergoes *shape oscillations* (see figure). The frequency ν of oscillation of a drop depends on its equilibrium radius, its density and the surface tension.



What would be the numerical value of the ratio $\nu_{\text{Hg}}/\nu_{\text{H}_2\text{O}}$ of the frequencies of oscillation between a drop of mercury (Hg) and a drop of water (H_2O) of the same equilibrium radius ?

You may use the following data:

Liquid	Density in gm cm^{-3}	Surface tension in N m^{-1}
water	1.0	0.073
mercury	13.6	0.487

Ans = 0.7

GS-2017-Y (Physics)

Section C

Q. 41 – 55 : to be attempted only by candidates for Ph.D. programme.

(Candidates for Integrated M.Sc.-Ph.D. programme will get NO credit for attempting this section.)

PLEASE READ CAREFULLY BEFORE PROCEEDING FURTHER

The following questions (41 – 50) are all of multiple-choice type. For every question, four options (a), (b), (c) and (d) are given, of which *only one* is correct. Indicate the correct option on the OMR by filling in the bubble next to the correct label.

A correct answer will be awarded +3 marks and an incorrect answer will be awarded –1 mark. If the question is not attempted, no marks will be awarded.

41. The value of the integral

$$\int_0^{\infty} \frac{dx}{x^4 + 4}$$

Is

- (a) $\frac{\pi}{8}$ ✓ (b) $\frac{\pi}{4}$ (c) $\frac{\pi}{2}$ (d) π

42. The Lagrangian of a system described by a single generalised coordinate q is

$$L = \frac{1}{2} \dot{q} \sin^2 q$$

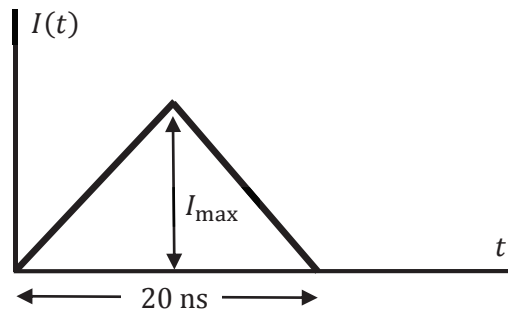
Its Hamiltonian is

- (a) Zero (b) $\dot{q} \left(p - \frac{1}{2} \sin^2 q \right)$
(c) $-\dot{q} \sin^2 q$ (d) not defined ✓

43. A one-dimensional quantum harmonic oscillator of natural frequency ω is in thermal equilibrium with a heat bath at temperature T . The mean value $\langle E \rangle$ of the energy of the oscillator can be written as

- (a) $\frac{\hbar\omega}{2} \coth\left(\frac{\hbar\omega}{2k_B T}\right)$ ✓ (b) $\frac{\hbar\omega}{2} \operatorname{csch}\left(\frac{\hbar\omega}{2k_B T}\right)$
(c) $\frac{\hbar\omega}{2} \operatorname{sech}\left(\frac{\hbar\omega}{2k_B T}\right)$ (d) $\frac{\hbar\omega}{2} \tanh\left(\frac{\hbar\omega}{2k_B T}\right)$

47. A photomultiplier tube is used to detect identical light pulses each of which consists of a fixed number of photons. The photoelectric efficiency is 10%, i.e. a photon has 10% probability of causing the emission of a detectable photo-electron. The photomultiplier gain is 10^6 .



The typical output current, as a function of time, is shown by the figure below for a few pulses, where I_{\max} is $80 \mu\text{A}$. It follows that the number of photons in each pulse is

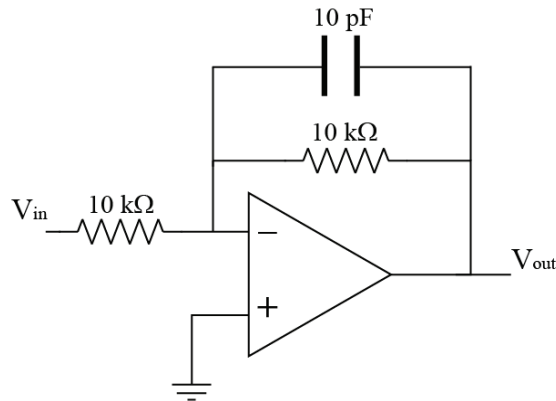
- (a) 5×10^6 (b) 50 ✓
 (c) 800 (d) 5
48. A subatomic particle ψ and its excited state ψ^* have rest masses $3.1 \text{ GeV}/c^2$ and $3.7 \text{ GeV}/c^2$ respectively. A table of its assigned quantum numbers is given below.

Angular Momentum	Parity	C-Parity	Isospin	Electric charge
$J = 1$	$P = -1$	$C = -1$	$I = 0$	$Q = 0$

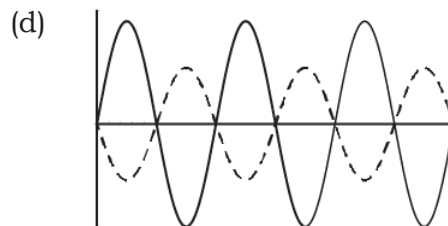
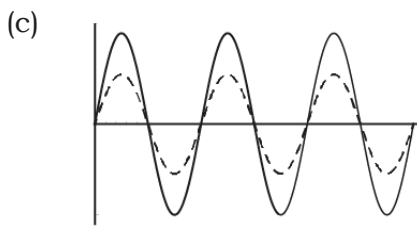
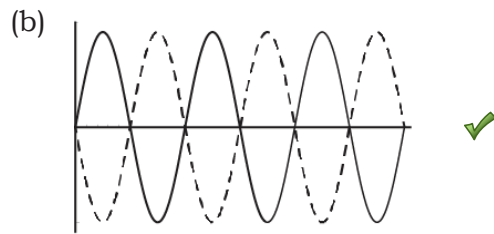
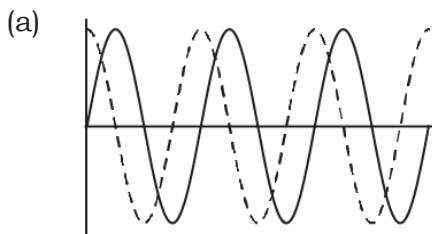
If π^{0*} is an excited state of π^0 with a mass of about $1.3 \text{ GeV}/c^2$, which of the following reactions is possible when the above quantum numbers are conserved?

- (a) $\psi^* \rightarrow \gamma\gamma$ (b) $\psi^* \rightarrow \pi^0\pi^0$
 (c) $\psi^* \rightarrow \psi\pi^+\pi^-$ ✓ (d) $\psi^* \rightarrow \psi\pi^{0*}$
49. The cosmic microwave background radiation in the Universe has a blackbody distribution corresponding to a temperature 2.735 K. In a certain cosmological model, it was assumed that the universe consists purely of radiation and is undergoing adiabatic expansion. In this model it was predicted that the volume of the Universe will be tripled in the next 10^{10} yrs. The corresponding blackbody radiation temperature would be
- (a) 0.9116 K (b) 2.078 K
 (c) 1.526 K (d) 1.896 K ✓

50. The following circuit is fed with an input sine wave of frequency 50 Hz.



Which of the following graphs (solid line is input and dashed line is output) best represents the correct situation?



**Part C continues on next page
(to be attempted by all candidates for Ph.D. programme)
PLEASE READ CAREFULLY BEFORE PROCEEDING FURTHER**

Each of the following questions (51 – 55) must be answered by a word or a number or a simple mathematical expression, which must be written down clearly and legibly using only black/blue ballpoint pen. If there are any cancellations, overwriting or erasures, the question will be considered un-answered.

Use only values of constants given in the table ‘USEFUL CONSTANTS’.

A correct answer will be awarded +5 marks.

There are NO NEGATIVE MARKS for these questions.

51. Electrons in a metal are scattered by both impurities and phonons. The impurity scattering time is 8×10^{-12} s and the phonon scattering time is 2×10^{-12} s. Taking the density of electrons to be $3 \times 10^{14} \text{ m}^{-3}$, find the conductivity of the metal in units of $\text{A V}^{-1} \text{ m}^{-1}$. [Assume that the effective mass of the electrons is the same as that of a free electron.]

Ans = 13.5×10^{-6}

52. A particle of mass m , confined to one dimension x , is in the ground state of a harmonic oscillator potential with a normalized wave function

$$\Psi_0(x) = \left(\frac{2a}{\pi}\right)^{\frac{1}{4}} e^{-ax^2}$$

where $a = m\omega/2\hbar$. Find the expectation value of x^8 in terms of the parameter a .

Ans = $105/(256 \cdot a^4)$

53. Write down $x(t)$, where $x(t)$ is the solution of the following differential equation

$$\left(\frac{d}{dt} + 2\right)\left(\frac{d}{dt} + 1\right)x = 1,$$

with the boundary conditions

$$\left.\frac{dx}{dt}\right|_{t=0} = 0, \quad x(t)|_{t=0} = -\frac{1}{2}$$

Ans = $\exp(-2t) - 2\exp(-t) + 1/2$

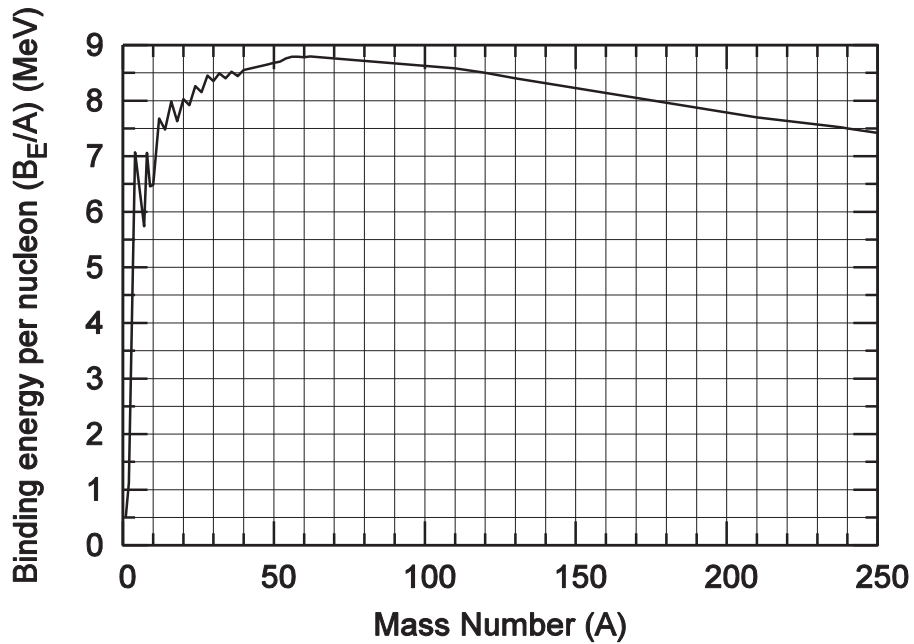
54. Assume that the crystal structure of metallic copper (Cu) results in a density of atoms $\rho_{\text{Cu}} = 8.46 \times 10^{28} \text{ m}^{-3}$. Each Cu atom in the crystal donates one electron to the conduction band, which leads, for the 3-D Fermi gas, to a density of states

$$g(\varepsilon) = \frac{1}{2\pi^2} \left(\frac{2m^*}{\hbar^2}\right)^{3/2} \varepsilon^{1/2}$$

where m^* is the effective mass of the conduction electrons. In the low temperature limit (i.e. $T = 0 \text{ K}$), find the Fermi energy E_F , in units of eV. You may assume m^* to be equal to the free electron mass m_e .

Ans = 6.87

55. In a theoretical model of the nucleus, the binding energy per nucleon was predicted as shown in the figure below.



If a nucleus of mass number $A = 240$ undergoes a symmetric fission to two daughter nuclei each of mass number $A = 120$, write down the amount of energy released in this process, in units of MeV, using this theoretical model.

Ans = 240